


Name \_\_\_\_\_



1. Which time does the clock show?

- (A) 12 o'clock
- (B) 7 o'clock
- (C) 6 o'clock
- (D) 5 o'clock



2. Which time is in between?

- (A) 11 o'clock
- (B) 12 o'clock
- (C) 1 o'clock
- (D) 2 o'clock



3. Use words or pictures.

Tell about 2 things you like to do at school.

Draw hands on the clock faces to show the times.

